



Write the name of each note above the staff




Place a sharp or flat sign next to the note to designate pitches half-steps higher or lower as indicated by the arrows. Then write and name the ENHARMONIC pitch.




Define the following terms:

1. Treble clef:



2. Bass Clef:

3. Interval:



4. Accidental: