





Identify the following intervals as Perfect, diminished, or augmented 4ths, 5ths, or octaves.



Write the correct note above the given note to form the requested interval. (Remember: the name of the note must be correct. You may use double sharps [## or x] or double flats [bb]. A double sharp or double flat simply changes the pitch by 2 half-steps instead of one.)



P5      P4      P8      Dim 4      Aug4      P4      Aug 8      Dim 5      Aug 5

Write the correct note BELOW the given note to form the requested interval



Dim 4      P5      P5      P4      P4      Dim4      Aug 5      P5