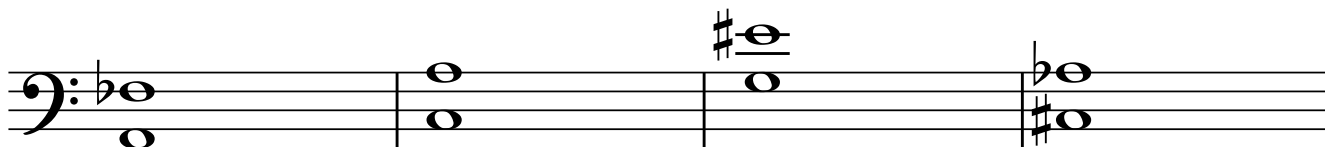
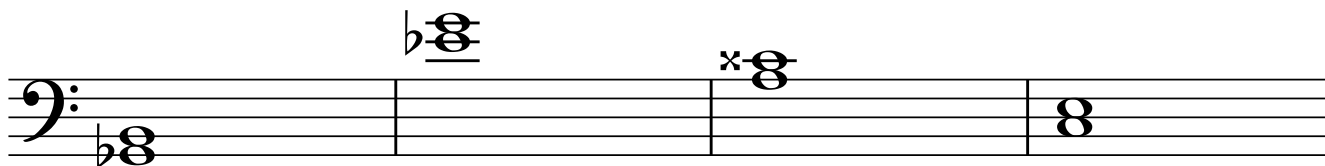

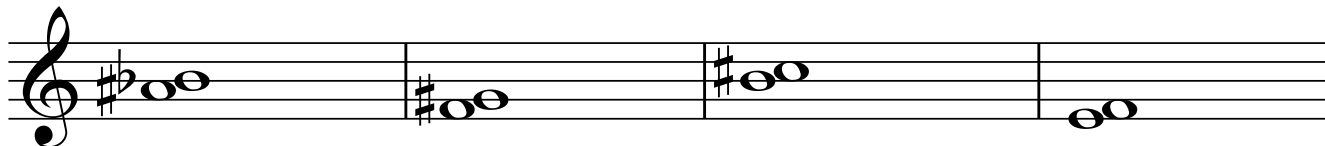


Identify the following intervals



2

Write in the note to form the given interval. Remember: first establish the name of the note based on the INTERVAL. Then put in the sharps and flats. You may need to use double sharps (x) or double flats (bb).

M3 up

m7 up

dim 3 down

aug 2 up

aug 6 up

m3 down

M2 up

Aug 7 up

M7 down

M 6 up

P4 up

Aug 5 down

Aug 2 up

Dim 6th down

P8 up

Aug 8 down